

Risolvi le sequenze.



3

1

1

1



5

1

.....

.....

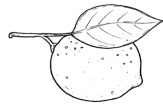


8

.....

.....

.....

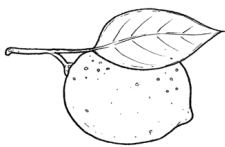


10


.....

.....

.....



= .....



Risolvi le sequenze



6

.....

.....

.....



8

.....

.....

.....



13

.....

.....

.....



25

.....

.....

.....



50

.....

.....

.....



= .....