
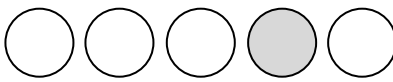



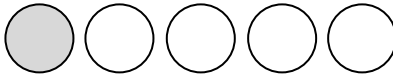



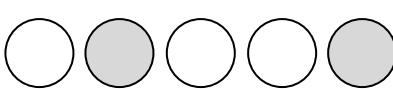


Nome _____ Cognome _____

Verifica di matematica

Numera i pallini grigi:

Inserisci <, >, =

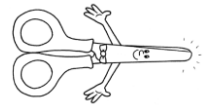
- 14 ... 41 20 ... 20 25 ... 50 16 ... 14 43 ... 13
50 ... 45 46 ... 15 29 ... 32 17 ... 7 50 ... 25

Esegui le addizioni in colonna (usa il foglio)



<table border="1"><tr><td> </td><td> </td></tr></table> 43 + 15 = _____			<table border="1"><tr><td> </td><td> </td></tr></table> 27 + 11 = _____			<table border="1"><tr><td> </td><td> </td></tr></table> 35 + 24 = _____			<table border="1"><tr><td> </td><td> </td></tr></table> 19 + 40 = _____		

Esegui le sottrazioni in colonna (usa il foglio)



--	--

$47 -$

$15 =$

--	--

$34 -$

$22 =$

--	--

$18 -$

$10 =$

--	--

$49 -$

$29 =$

Calcola a mente:

$9 + 1 =$

$35 + 5 =$

$22 + 8 =$

$25 + 0 =$

$27 - 27 =$

$35 - 3 =$

$6 - 4 =$

$10 - 6$

Dalle prove INVALSI:

Filippo ha raccolto alcuni sassi sulla spiaggia. Aiutalo a ordinarli dal più pesante al meno pesante.



1



2



3



4



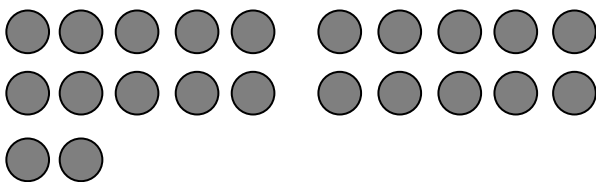
5

A. 5 • 1 • 2 • 4 • 3

B. 2 • 5 • 1 • 3 • 4

C. 5 • 2 • 3 • 1 • 4

Quante palline mancano per arrivare a 30?



A. 8

B. 3

C. 5

$30/30=10$ $27/30=9$ $24/30=8$ $21/30=7$ $18/30=6$ $15/30=5$

BY PAOLA VIALE