

NOME _____ COGNOME _____

VERIFICA FINALE SUL NUMERO

COLORA CON LO STESSO COLORE LE STESSE QUANTITÀ

DODICI

11

$10 + 3$

TREDICI

14

$10 + 1$

QUATTORDICI

12

$10 + 2$

UNDICI

13

$10 + 4$

QUANTE DECINE? QUANTE UNITÀ?

19

.....DAU

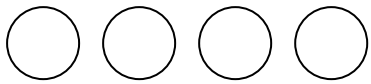
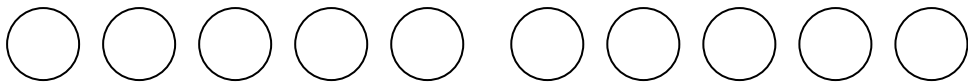
17

.....DAU

11

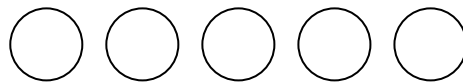
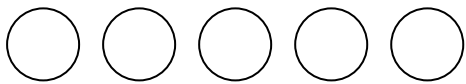
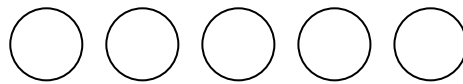
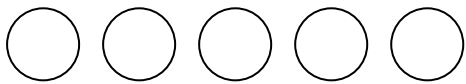
..... DAU

RAGGRUPPA PER DECINE E UNITÁ LE SEGUENTI RAPPRESENTAZIONI NUMERICHE:



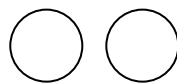
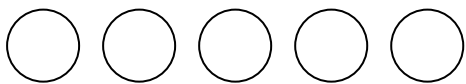
HAI OTTENUTO QUINDI

| DA | U |
|----|---|
| | |



HAI OTENUTO QUINDI

| DA | U |
|----|---|
| | |



HAI OTTENUTO QUINDI

| DA | U |
|----|---|
| | |